





LEGO MATH: PERIMETER WORKSHEET:

WRITE THE NUMBER OF DOTS YOU COUNTED ON EACH SIDE OF YOUR SHAPE & ADD THEM UP!




SIDE ONE

+




SIDE TWO

+




SIDE THREE

+



SIDE FOUR

=



My Lego Perimeter!